

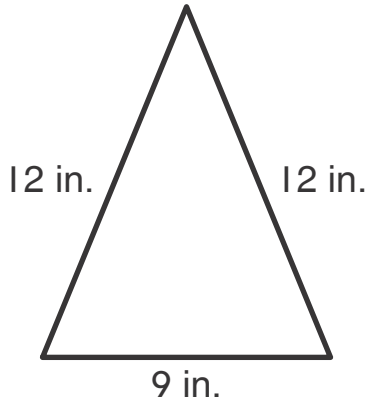
Name _____

Total or Missing

Find the distance around each shape. Write an equation with an unknown for each problem.

Sample equations given.

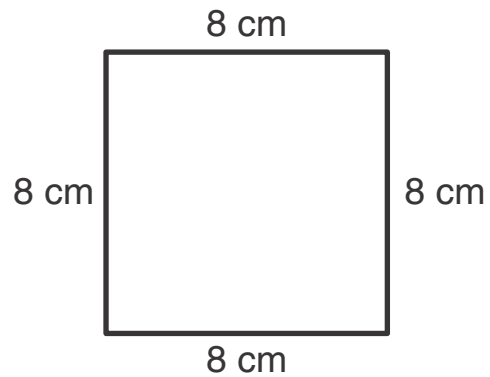
1.



$$12 + 12 + 9 = ?$$

33 inches

2.

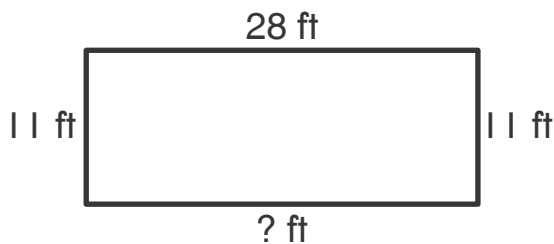


$$8 + 8 + 8 + 8 = ?$$

32 centimeters

Find each missing side length. Write an equation with an unknown for each problem.

3.

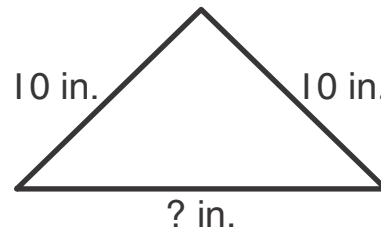


Distance around shape:
78 in.

$$11 + 11 + 28 + ? = 78$$

28 feet

4.



Distance around shape:
36 in.

$$10 + 10 + ? = 36$$

16 inches