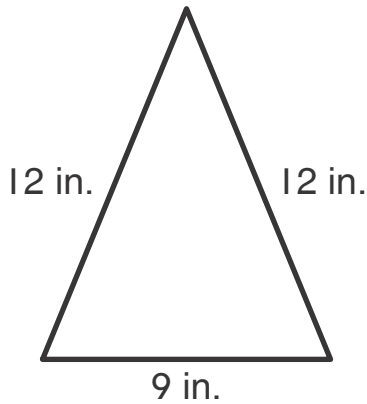


Name _____

Total or Missing

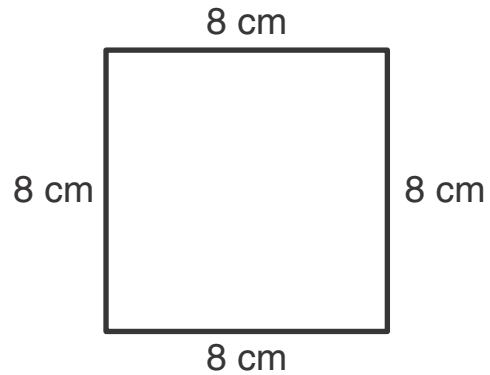
Find the distance around each shape. Write an equation with an unknown for each problem.

1.



_____ inches

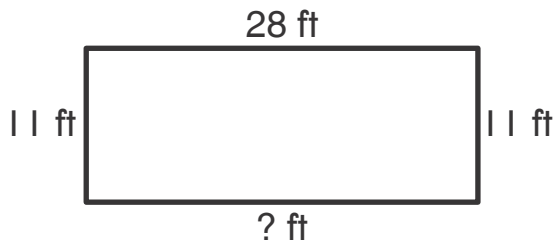
2.



_____ centimeters

Find each missing side length. Write an equation with an unknown for each problem.

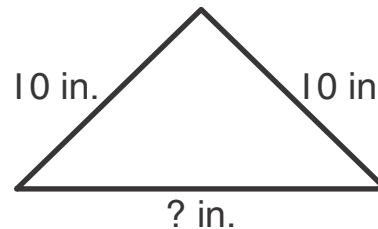
3.



Distance around shape:
78 in.

_____ feet

4.



Distance around shape:
36 in.

_____ inches