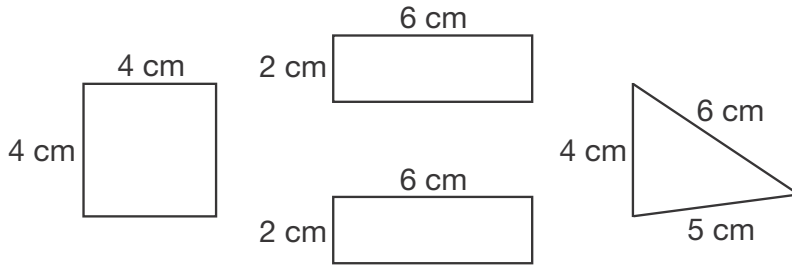



Name _____

Henry's Shapes

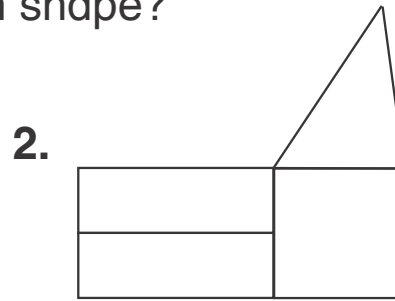
Henry uses these 4 blocks to make two different shapes.



What is the distance around each shape?



_____ cm



_____ cm

3. Draw a shape using 3 of Henry's blocks.
Find the distance around your shape.



The distance around my shape is _____ cm.