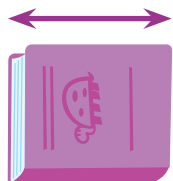


# My Word Cards

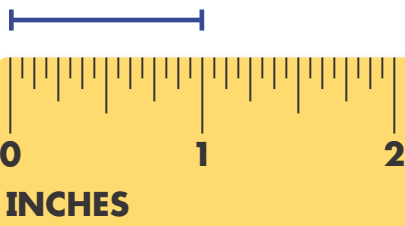
Study the words on the front of the card.  
Complete the activity on the back.

estimate

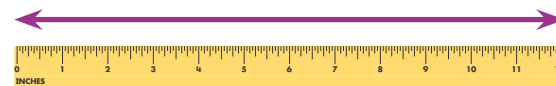
I think the book is about 1 foot long.



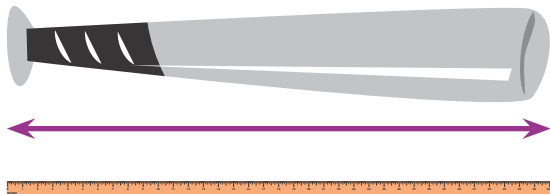
inch (in.)



foot (ft)




yard (yd)



length



height



# My Word Cards

Use what you know to complete the sentences.

Extend learning by writing your own sentence using each word.

A \_\_\_\_\_

is a standard unit of length equal to 12 inches.

An \_\_\_\_\_

is a standard unit of length that is a part of 1 foot.

When you \_\_\_\_\_,

you make a good guess.

\_\_\_\_\_ is how tall an object is from bottom to top.

\_\_\_\_\_ is the distance from one end to the other end of an object.

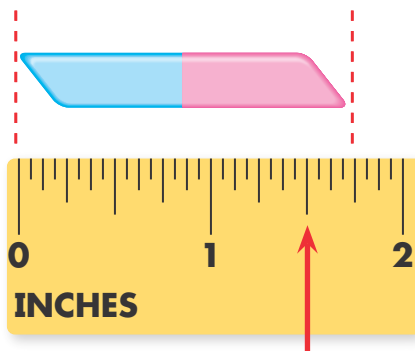
A \_\_\_\_\_

is a standard unit of length equal to 3 feet.

# My Word Cards

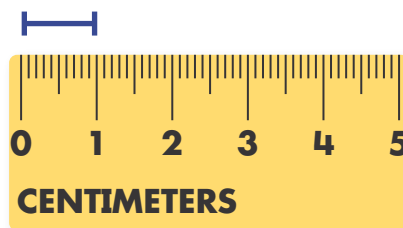
Study the words on the front of the card.  
Complete the activity on the back.

nearest inch

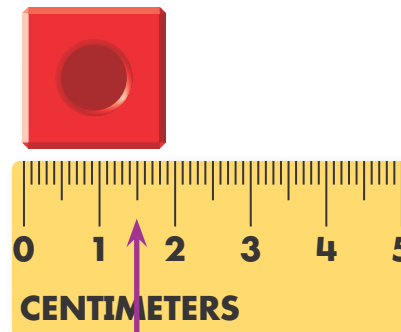


halfway mark

centimeter (cm)

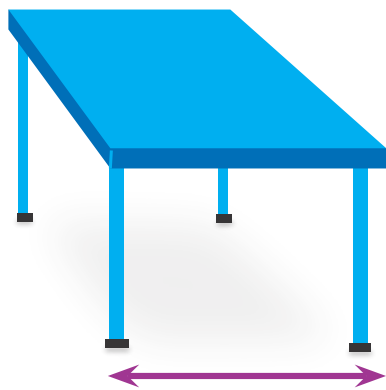


nearest centimeter



halfway mark

meter (m)



100 cm

# My Word Cards

Use what you know to complete the sentences.

Extend learning by writing your own sentence using each word.

The centimeter closest to the measure is the

\_\_\_\_\_.

A \_\_\_\_\_

is a metric unit of length that is a part of 1 meter.

The inch closest to the measure is the

\_\_\_\_\_.

A \_\_\_\_\_

is a metric unit of length equal to 100 centimeters.