

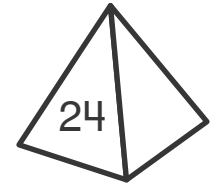
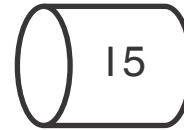

Name _____

Enrichment

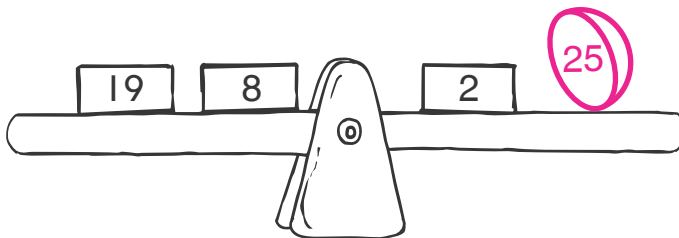
5-4

Seesaw Subtraction

The totals on both sides of each seesaw must be equal. Draw the half ball, cube, cylinder, or pyramid on the right of each seesaw to make it balance. Then write the subtraction problem that helped you.



1.



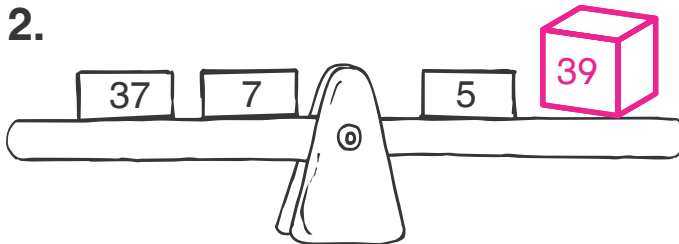
Left
side
total

Right
side

New
piece

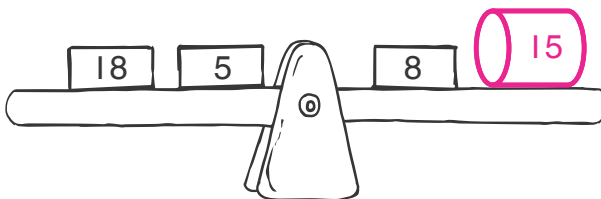
$$27 - 2 = 25$$

2.



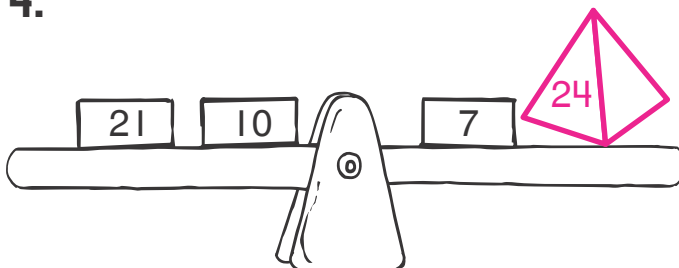
$$44 - 5 = 39$$

3.



$$23 - 8 = 15$$

4.



$$31 - 7 = 24$$