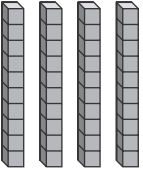
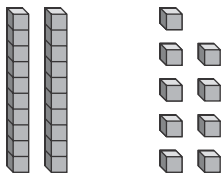


Name \_\_\_\_\_

# Missing Ones and Tens

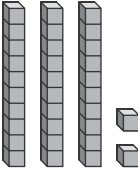
Write the number of ones or tens that are missing for each addition. Regroup as needed. You can use place-value blocks to help.

1.  ? ones



Sum = 76


7 ones

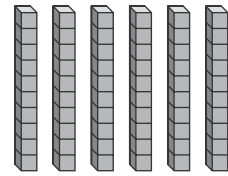
2.  ? tens



Sum = 61

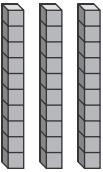
2 tens

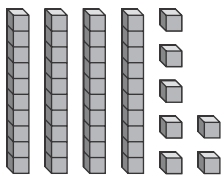
3.  ? ones



Sum = 77

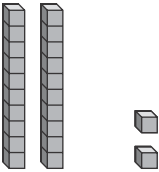
5 ones

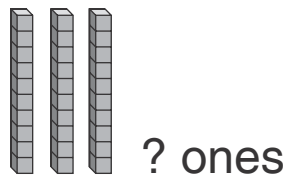
4.  ? ones



Sum = 80

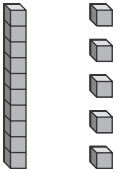
3 ones

5.  ? ones



Sum = 58

6 ones

6.  ? tens



Sum = 53

3 tens