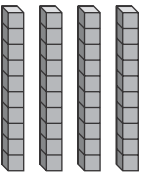
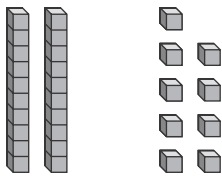


Name \_\_\_\_\_

# Missing Ones and Tens

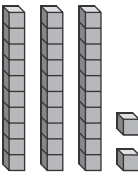
Write the number of ones or tens that are missing for each addition. Regroup as needed. You can use place-value blocks to help.

1.  ? ones



Sum = 76


\_\_\_\_\_ ones

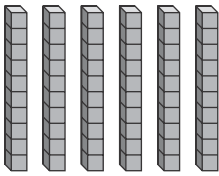
2. 

? tens 

Sum = 61

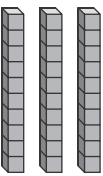
\_\_\_\_\_ tens

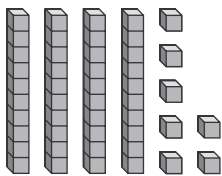
3. 

 ? ones

Sum = 77

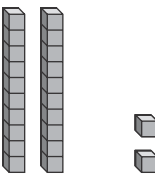
\_\_\_\_\_ ones

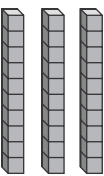
4.  ? ones



Sum = 80

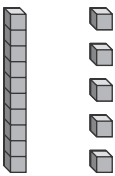
\_\_\_\_\_ ones

5. 

 ? ones

Sum = 58

\_\_\_\_\_ ones

6. 

? tens 

Sum = 53

\_\_\_\_\_ tens