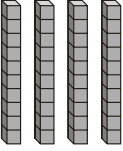
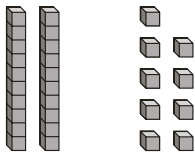


# Unidades y decenas que faltan

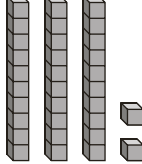
Escribe la cantidad de unidades o decenas que faltan en cada suma.  
Reagrupa según sea necesario. Puedes usar bloques de valor de posición como ayuda.

1.  ? unidades



Suma = 76


  7   unidades

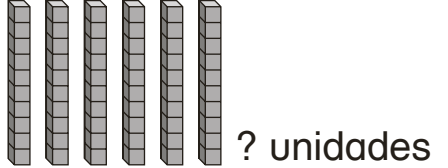
2.  ? decenas



Suma = 61

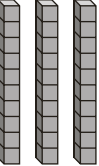
  2   decenas

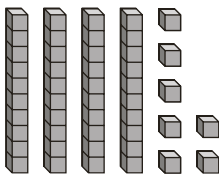
3.  ? unidades



Suma = 77

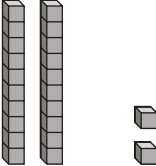
  5   unidades

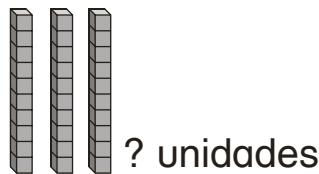
4.  ? unidades



Suma = 80

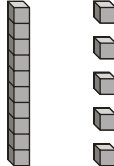
  3   unidades

5.  ? unidades



Suma = 58

  6   unidades

6.  ? decenas



Suma = 53

  3   decenas