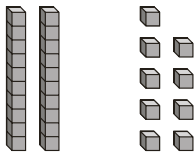
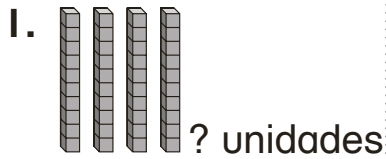


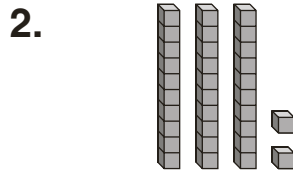
# Unidades y decenas que faltan

Escribe la cantidad de unidades o decenas que faltan en cada suma.  
Reagrupa según sea necesario. Puedes usar bloques de valor de posición como ayuda.



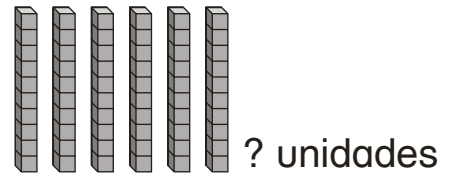
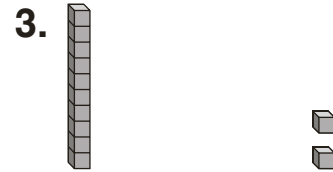
Suma = 76

\_\_\_\_\_ unidades



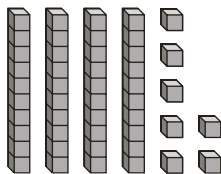
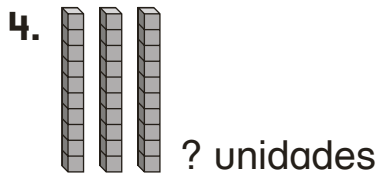
Suma = 61

\_\_\_\_\_ decenas



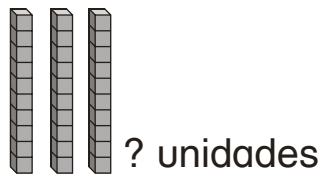
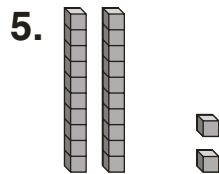
Suma = 77

\_\_\_\_\_ unidades



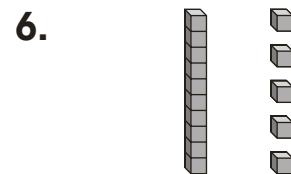
Suma = 80

\_\_\_\_\_ unidades



Suma = 58

\_\_\_\_\_ unidades



Suma = 53

\_\_\_\_\_ decenas